

Name: _____

Date: _____

ADDITION

Count the pictures. Add the numbers.
Write the sum in the box.

1



$$3 + 2 = \square$$

2




$$2 + 3 = \square$$

3



$$4 + 1 = \square$$

4



$$5 + 2 = \square$$

5




$$3 + 2 = \square$$

6




$$1 + 2 = \square$$

7



$$4 + 3 = \square$$

8



$$2 + 3 = \square$$

9



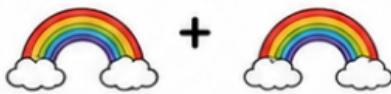
$$6 + 1 = \square$$

10



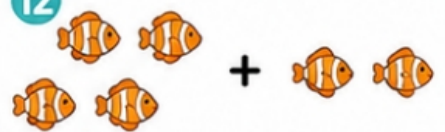
$$3 + 2 = \square$$

11



$$1 + 1 = \square$$

12



$$5 + 2 = \square$$



Great job! Keep up the awesome work!

