






Name..... Class.....

EASTER PUZZLES



Instructions: Determine what each of the Easter images represent in the following maths problems:



+



+



=

18



+



+



+



=

12



+



+



=

25




+



+



=



+




+



+



=



KidsNest.in

