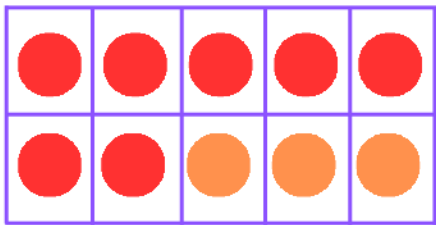




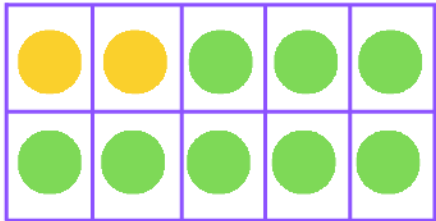
Name..... Class.....

 Partitioning numbers to 10 

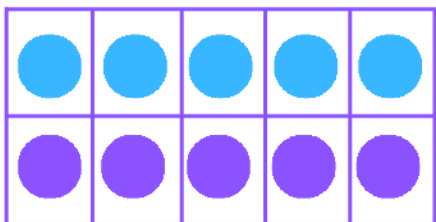
Complete the sums below by counting the two parts in the tens frame to find the whole amount.



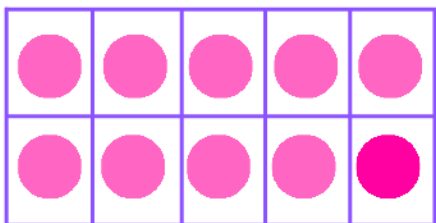
$$7 + 3 = 10$$



$$+ =$$



$$+ =$$



$$+ =$$

