



Name..... Class.....

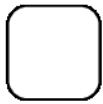
# Measurement Comparisons

Label the sets of items according to size:

1.



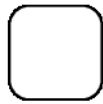
1



small



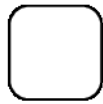
2



medium



3

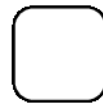


large

2.



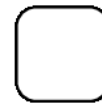
1



small



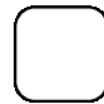
2



medium



3



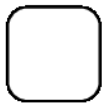
large

Label the sets of items according to mass:

3.



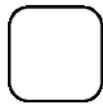
1



lightest



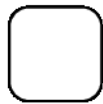
2



medium



3

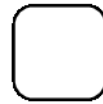


heaviest

4.



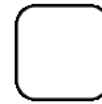
1



lightest



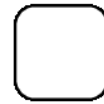
2



medium



3




heaviest

Label the sets of items according to capacity:

5.




1



least




2



medium



3

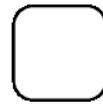


most

6.



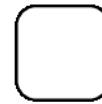
1



least



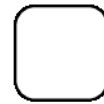
2



medium



3



most

