


Name: _____ Date:  July 17 _____ Class:  _____

POLYGON


Count the number of sides of each polygon and classify what type of polygon is it based on its number of sides.




Sides: _____
Polygon: _____



Sides: _____
Polygon: _____




Sides: _____
Polygon: _____




Sides: _____
Polygon: _____



Sides: _____
Polygon: _____




Sides: _____
Polygon: _____



Sides: _____
Polygon: _____



Sides: _____
Polygon: _____



Sides: _____
Polygon: _____